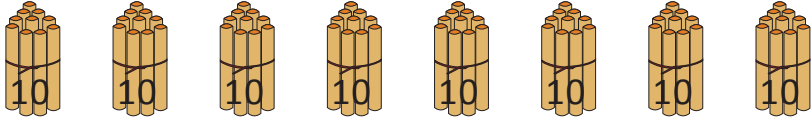
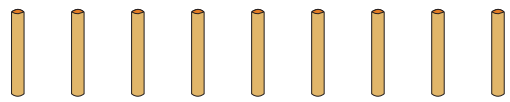




NAME _____ DATE _____



FINDING PLACE VALUE BASED ON OBJECTS

Count the objects and fill in the number bond. Complete the sentences to add the tens and ones.

1)  $8 \times 10 = 80$
 $9 \times 1 = 9$
 _____ + _____ = _____


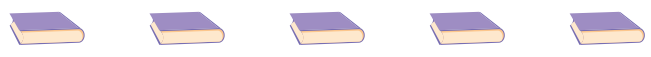
Tens	Ones

_____ tens + _____ ones = _____.

2)  $9 \times 10 = 90$
 $7 \times 1 = 7$
 _____ + _____ = _____



Tens	Ones

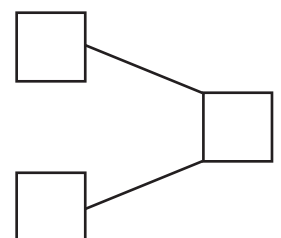
_____ tens + _____ ones = _____.

3)  $6 \times 10 = 60$
 $5 \times 1 = 5$
 _____ + _____ = _____

Tens	Ones

_____ tens + _____ ones = _____.

4)  $3 \times 10 = 30$
 $8 \times 1 = 8$
 _____ + _____ = _____



_____ tens + _____ ones = _____.